



**DISTANCE LEARNING PACKET**

**KINDERGARTEN**

Name: \_\_\_\_\_

Date: \_\_\_\_\_

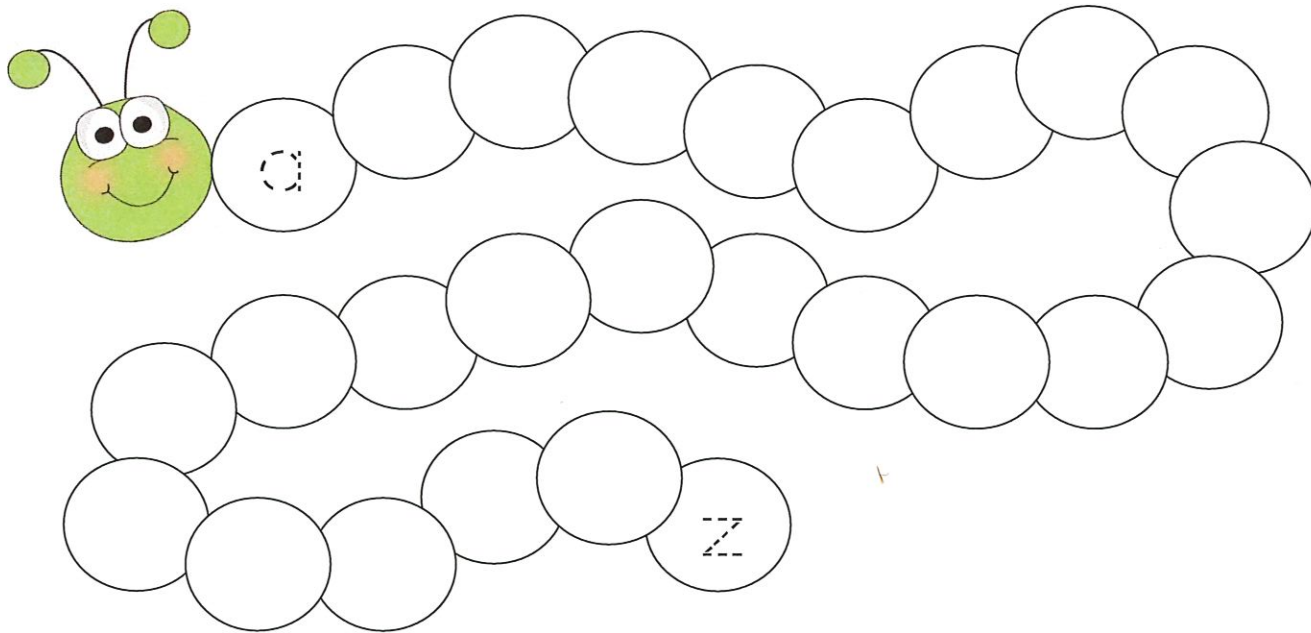
Day 6

# Move-Your-Fingers

Today you will be moving those fingers to complete reading and math activities.

Reading

Practice those handwriting skills. Write the entire alphabet using LOWERCASE letters. Remember to use your best writing!



Math

Fill in the missing numbers.

0		2	3		5
	7	8	9		11
12		14	15		17

Bonus

Write the missing letters: m \_\_\_\_\_ o \_\_\_\_\_ q \_\_\_\_\_ s

Name: \_\_\_\_\_

Date: \_\_\_\_\_

**Day 7**

# Tap-And-Count

Practice your counting skills to complete today's reading and math activities.

## Reading

Count the letters in the sight words and write them in the correct column.  
Practice reading the sight words.

one the can on am look it that

2 letters	3 letters	4 letters

## Math

Count the tally marks. Make sure to tap each one! Write the correct number.

~~||||~~   ~~||||~~   |||   \_\_\_\_\_

~~||||~~   ~~||||~~   ~~||||~~   \_\_\_\_\_

~~||||~~   ~~||||~~   ||   \_\_\_\_\_

~~||||~~   ~~||||~~   ||||   \_\_\_\_\_

**BONUS**

How many sight words did you write in all? \_\_\_\_\_

Name: \_\_\_\_\_

Date: \_\_\_\_\_


**Day 8**

# Break-It-Up

Break apart words and numbers to complete today's reading and math activities.


Look at the pictures and sound them out. Circle the correctly spelled word.

**Reading**




wib

web



jug

gug

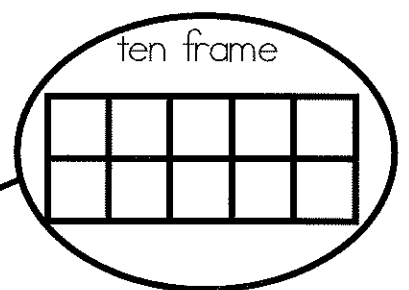



sab

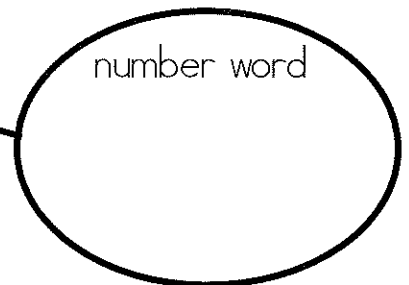
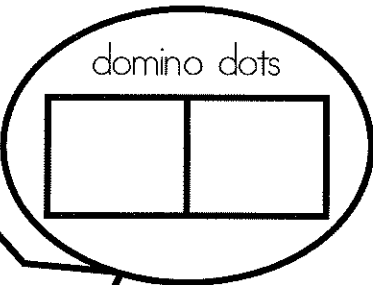
sad

Today you will be making a "Number" web. Read the number 6 in the middle. On each circle, show the number 6 in different ways.

**Math**



**6**



**BONUS**

What is one LESS than six? \_\_\_\_\_

Name: \_\_\_\_\_

Date: \_\_\_\_\_


Day 9

# Think-It-Out

Exercise your creative thinking skills to complete your reading and math activities.

## Reading



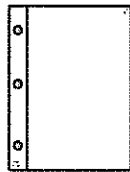
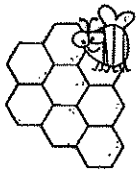

Finish the sentence. Draw a picture that matches your sentence..



I see a big and green \_\_\_\_\_.

## Math

Shapes can be many things. Draw the shape that makes up each picture.



BONUS

How many windows do you have in your house? \_\_\_\_\_

Name: \_\_\_\_\_

Date: \_\_\_\_\_

**Day 10**

# Fast-and-Fluent

How fast can you read? Today's reading and math activities will increase your fluency.

## Reading

Practice reading the lowercase letters as fast as you can. Read them 5 times.

k	m	b	l	d	o
r	i	t	h	q	f
n	x	e	w	s	u
g	p	y	a	j	z
c	v				

## Math

Count to 50 by ones.

1	2	3	4	5	6	7	8	9	10
11	12	13	14	15	16	17	18	19	20
21	22	23	24	25	26	27	28	29	30
31	32	33	34	35	36	37	38	39	40
41	42	43	44	45	46	47	48	49	50

**BONUS**

Count to 100 by 1's and 10's.